


Mathematik / Grundrechenarten


Matheaufgaben für die 1. Klasse: Additionsaufgabe finden bis 10

Zähle die Bilder und finde die Aufgabe:

1)




$$10 = 6 + \underline{\quad}$$




$$7 = \underline{\quad} + \underline{\quad}$$

2)




$$9 = \underline{\quad} + \underline{\quad}$$




$$10 = \underline{\quad} + \underline{\quad}$$

3)




$$7 = \underline{\quad} + \underline{\quad}$$




$$8 = \underline{\quad} + \underline{\quad}$$

4)



$$9 = \underline{\quad} + \underline{\quad}$$




$$8 = \underline{\quad} + \underline{\quad}$$

Mathematik / Grundrechenarten


Matheaufgaben für die 1. Klasse: Additionsaufgabe finden bis 10

Lösungen

1)




$$10 = 6 + 4$$




$$7 = 3 + 4$$

2)




$$9 = 4 + 5$$




$$10 = 3 + 7$$

3)




$$7 = 2 + 5$$




$$8 = 2 + 6$$

4)



$$9 = 6 + 3$$



$$8 = 7 + 1$$