

Mathematik / Grundrechenarten


Matheaufgaben ab Klasse 2: Multiplikation bis 20

Finde die 2 Aufgaben, die zu jedem Bild gehören:

1




$$2 \cdot 10 = 10 \cdot 2 = 20$$




$$_ \cdot _ = _ \cdot _ = _$$

2




$$_ \cdot _ = _ \cdot _ = _$$




$$_ \cdot _ = _ \cdot _ = _$$

3




$$_ \cdot _ = _ \cdot _ = _$$



$$_ \cdot _ = _ \cdot _ = _$$

4



$$_ \cdot _ = _ \cdot _ = _$$



$$_ \cdot _ = _ \cdot _ = _$$