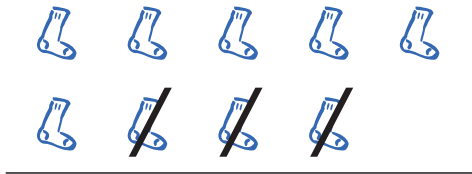


# Mathematik / Grundrechenarten

Matheaufgaben für die 1. Klasse: Subtrahieren bis 10

Nutze die Bilder für die Subtraktion und streiche die richtige Anzahl durch:

1)



$$9 - 3 = 6$$

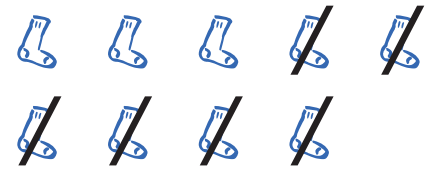


$$\underline{\quad} - \underline{\quad} = \underline{\quad}$$

2)

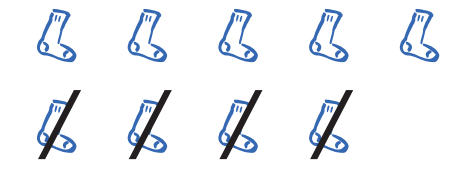


$$\underline{\quad} - \underline{\quad} = \underline{\quad}$$



$$\underline{\quad} - \underline{\quad} = \underline{\quad}$$

3)



$$\underline{\quad} - \underline{\quad} = \underline{\quad}$$

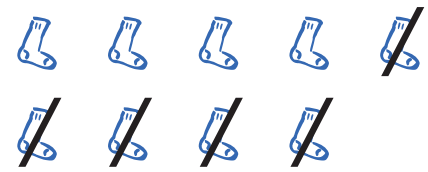


$$\underline{\quad} - \underline{\quad} = \underline{\quad}$$

4)



$$\underline{\quad} - \underline{\quad} = \underline{\quad}$$



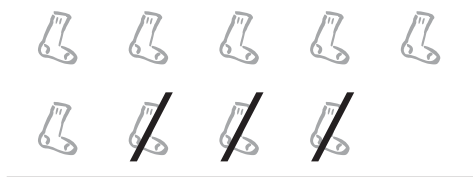
$$\underline{\quad} - \underline{\quad} = \underline{\quad}$$

# Mathematik / Grundrechenarten

Matheaufgaben für die 1. Klasse: Subtrahieren bis 10

## Lösungen

1)



$$9 - 3 = 6$$

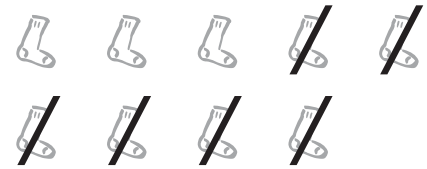


$$9 - 8 = 1$$

2)

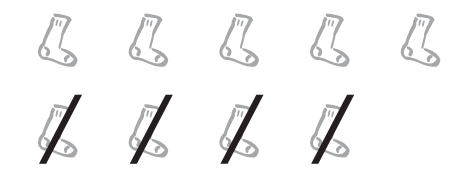


$$9 - 1 = 8$$



$$9 - 6 = 3$$

3)



$$9 - 4 = 5$$

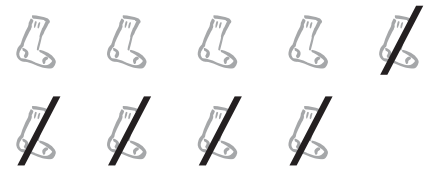


$$9 - 9 = 0$$

4)



$$9 - 7 = 2$$



$$9 - 5 = 4$$