


Mathematik / Grundrechenarten

Matheaufgaben für die 1. Klasse: Subtrahieren bis 10

Nutze die Bilder für die Subtraktion und streiche die richtige Anzahl durch:

1)



$$10 - 4 = 6$$

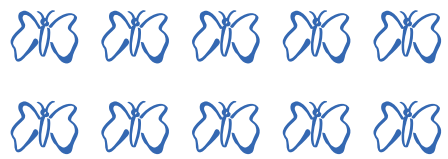


$$10 - 9 = \underline{\quad}$$

2)

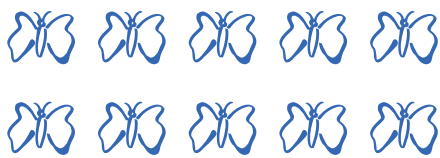


$$10 - 7 = \underline{\quad}$$



$$10 - 2 = \underline{\quad}$$

3)



$$10 - 6 = \underline{\quad}$$

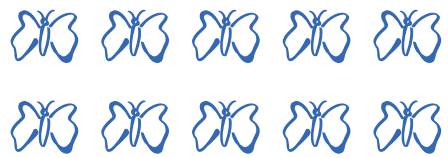


$$10 - 8 = \underline{\quad}$$

4)

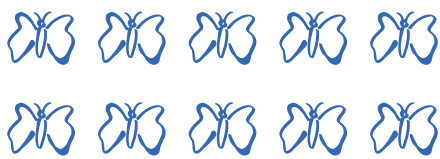


$$10 - 10 = \underline{\quad}$$



$$10 - 1 = \underline{\quad}$$

5)



$$10 - 3 = \underline{\quad}$$



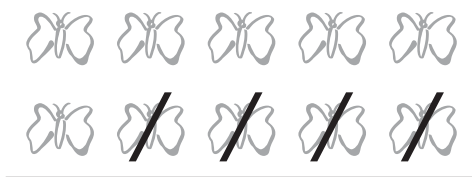
$$10 - 5 = \underline{\quad}$$

Mathematik / Grundrechenarten

Matheaufgaben für die 1. Klasse: Subtrahieren bis 10

Lösungen

1)



$$10 - 4 = 6$$



$$10 - 9 = 1$$

2)




$$10 - 7 = 3$$



$$10 - 2 = 8$$

3)



$$10 - 6 = 4$$



$$10 - 8 = 2$$

4)




$$10 - 10 = 0$$



$$10 - 1 = 9$$

5)



$$10 - 3 = 7$$



$$10 - 5 = 5$$