

Mathematik / Grundrechenarten


Matheaufgaben für die 1. Klasse: Subtrahieren bis 10

Nutze die Bilder für die Subtraktion und streiche die richtige Anzahl durch:

1)




$$10 - 3 = 7$$



$$\underline{\quad} - \underline{\quad} = \underline{\quad}$$

2)




$$\underline{\quad} - \underline{\quad} = \underline{\quad}$$



$$\underline{\quad} - \underline{\quad} = \underline{\quad}$$

3)




$$\underline{\quad} - \underline{\quad} = \underline{\quad}$$



$$\underline{\quad} - \underline{\quad} = \underline{\quad}$$

4)



$$\underline{\quad} - \underline{\quad} = \underline{\quad}$$



$$\underline{\quad} - \underline{\quad} = \underline{\quad}$$

5)



$$\underline{\quad} - \underline{\quad} = \underline{\quad}$$



$$\underline{\quad} - \underline{\quad} = \underline{\quad}$$

Mathematik / Grundrechenarten


Matheaufgaben für die 1. Klasse: Subtrahieren bis 10

Lösungen

1)




$$10 - 3 = 7$$



$$10 - 5 = 5$$

2)



$$10 - 7 = 3$$



$$10 - 1 = 9$$

3)




$$10 - 9 = 1$$




$$10 - 2 = 8$$

4)



$$10 - 6 = 4$$



$$10 - 8 = 2$$

5)



$$10 - 10 = 0$$



$$10 - 4 = 6$$