


Mathematik / Grundrechenarten


Matheaufgaben für die 1. Klasse: Subtrahieren bis 10

Nutze die Bilder für die Subtraktion und streiche die richtige Anzahl durch:

1



$$7 - 6 = 1$$




$$\underline{\quad} - \underline{\quad} = \underline{\quad}$$

2




$$\underline{\quad} - \underline{\quad} = \underline{\quad}$$



$$\underline{\quad} - \underline{\quad} = \underline{\quad}$$

3



$$\underline{\quad} - \underline{\quad} = \underline{\quad}$$



$$\underline{\quad} - \underline{\quad} = \underline{\quad}$$

4




$$\underline{\quad} - \underline{\quad} = \underline{\quad}$$




$$\underline{\quad} - \underline{\quad} = \underline{\quad}$$

5



$$\underline{\quad} - \underline{\quad} = \underline{\quad}$$



$$\underline{\quad} - \underline{\quad} = \underline{\quad}$$

Mathematik / Grundrechenarten

Matheaufgaben für die 1. Klasse: Subtrahieren bis 10

Lösungen

1




$$7 - 6 = 1$$




$$10 - 7 = 3$$

2



$$9 - 5 = 4$$



$$8 - 6 = 2$$

3



$$7 - 3 = 4$$



$$6 - 5 = 1$$

4



$$9 - 7 = 2$$



$$6 - 2 = 4$$

5



$$8 - 1 = 7$$



$$10 - 3 = 7$$