


Mathematik / Grundrechenarten


Matheaufgaben für die 1. Klasse: Additionsaufgabe finden bis 10

Zähle die Bilder und finde die Aufgabe:

1)




$$7 = 3 + 4$$




$$7 = _ + _$$

2)




$$7 = _ + _$$




$$7 = _ + _$$

3)



$$7 = _ + _$$




$$7 = _ + _$$

Mathematik / Grundrechenarten


Matheaufgaben für die 1. Klasse: Additionsaufgabe finden bis 10

Lösungen

1)




$$7 = 3 + 4$$




$$7 = 1 + 6$$

2)




$$7 = 5 + 2$$




$$7 = 6 + 1$$

3)



$$7 = 2 + 5$$



$$7 = 4 + 3$$