


Mathematik / Grundrechenarten

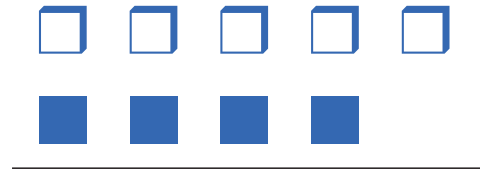
Matheaufgaben für die 1. Klasse: Additionsaufgabe finden bis 10

Zähle die Bilder und finde die Aufgabe:

1)




$$9 = 2 + 7$$

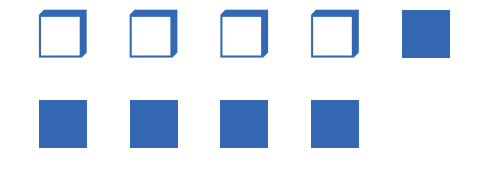


$$9 = _ + _$$

2)

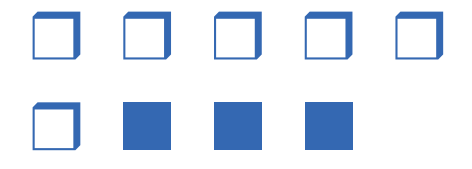


$$9 = _ + _$$




$$9 = _ + _$$

3)




$$9 = _ + _$$




$$9 = _ + _$$

4)



$$9 = _ + _$$




$$9 = _ + _$$

Mathematik / Grundrechenarten


Matheaufgaben für die 1. Klasse: Additionsaufgabe finden bis 10

Lösungen

1)




$$9 = 2 + 7$$




$$9 = 5 + 4$$

2)




$$9 = 8 + 1$$




$$9 = 4 + 5$$

3)




$$9 = 6 + 3$$




$$9 = 1 + 8$$

4)



$$9 = 3 + 6$$



$$9 = 7 + 2$$