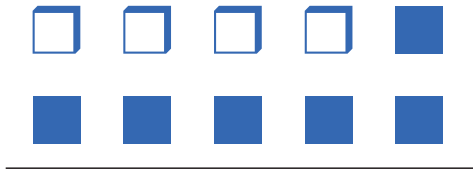


# Mathematik / Grundrechenarten

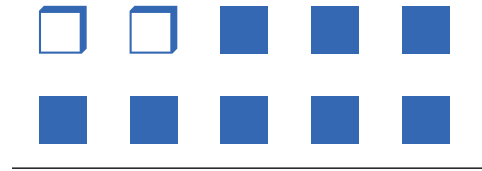
Matheaufgaben für die 1. Klasse: Additionsaufgabe finden bis 10

Zähle die Bilder und finde die Aufgabe:

1)




$$10 = 4 + 6$$

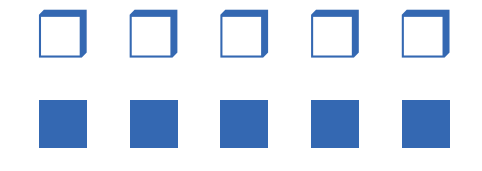


$$10 = \underline{\quad} + \underline{\quad}$$

2)




$$10 = \underline{\quad} + \underline{\quad}$$




$$10 = \underline{\quad} + \underline{\quad}$$

3)

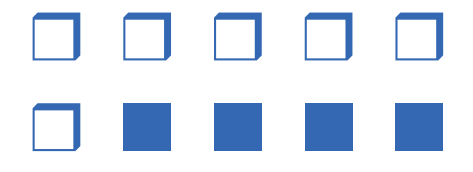


$$10 = \underline{\quad} + \underline{\quad}$$




$$10 = \underline{\quad} + \underline{\quad}$$

4)



$$10 = \underline{\quad} + \underline{\quad}$$



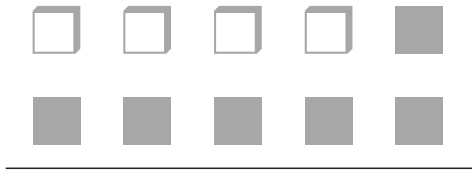
$$10 = \underline{\quad} + \underline{\quad}$$

# Mathematik / Grundrechenarten


Matheaufgaben für die 1. Klasse: Additionsaufgabe finden bis 10

## Lösungen

1)




$$10 = 4 + 6$$




$$10 = 2 + 8$$

2)




$$10 = 8 + 2$$




$$10 = 5 + 5$$

3)




$$10 = 1 + 9$$




$$10 = 3 + 7$$

4)



$$10 = 6 + 4$$



$$10 = 7 + 3$$