


# Mathematik / Grundrechenarten

Matheaufgaben für Klasse 2: Multiplikation bis 20


Finde die 2 Aufgaben, die zu jedem Bild gehören:

1)



---


$$2 \cdot 7 = 7 \cdot 2 = 14$$



---


$$\_ \cdot \_ = \_ \cdot \_ = \_$$

2)



---


$$\_ \cdot \_ = \_ \cdot \_ = \_$$



---


$$\_ \cdot \_ = \_ \cdot \_ = \_$$

3)



---


$$\_ \cdot \_ = \_ \cdot \_ = \_$$



---


$$\_ \cdot \_ = \_ \cdot \_ = \_$$

4)



---

$$\_ \cdot \_ = \_ \cdot \_ = \_$$



---


$$\_ \cdot \_ = \_ \cdot \_ = \_$$

# Mathematik / Grundrechenarten

Matheaufgaben für Klasse 2: Multiplikation bis 20


## Lösungen

1)



---


$$2 \cdot 7 = 7 \cdot 2 = 14$$



---


$$3 \cdot 4 = 4 \cdot 3 = 12$$

2)



---


$$3 \cdot 6 = 6 \cdot 3 = 18$$



---


$$2 \cdot 3 = 3 \cdot 2 = 6$$

3)



---


$$2 \cdot 5 = 5 \cdot 2 = 10$$



---


$$4 \cdot 5 = 5 \cdot 4 = 20$$

4)



---

$$3 \cdot 5 = 5 \cdot 3 = 15$$



---

$$2 \cdot 4 = 4 \cdot 2 = 8$$