


Mathematik / Grundrechenarten

Matheaufgaben für die 1. Klasse: Subtrahieren bis 10


Nutze die Bilder für die Subtraktion und streiche die richtige Anzahl durch:




$$7 - 1 = 6$$




$$\underline{\quad} - \underline{\quad} = \underline{\quad}$$



$$\underline{\quad} - \underline{\quad} = \underline{\quad}$$



$$\underline{\quad} - \underline{\quad} = \underline{\quad}$$




$$\underline{\quad} - \underline{\quad} = \underline{\quad}$$




$$\underline{\quad} - \underline{\quad} = \underline{\quad}$$



$$\underline{\quad} - \underline{\quad} = \underline{\quad}$$



$$\underline{\quad} - \underline{\quad} = \underline{\quad}$$



$$\underline{\quad} - \underline{\quad} = \underline{\quad}$$



$$\underline{\quad} - \underline{\quad} = \underline{\quad}$$

Mathematik / Grundrechenarten

Matheaufgaben für die 1. Klasse: Subtrahieren bis 10

Lösungen




$$7 - 1 = 6$$



$$6 - 5 = 1$$



$$9 - 5 = 4$$



$$10 - 3 = 7$$



$$6 - 4 = 2$$



$$9 - 7 = 2$$



$$7 - 6 = 1$$



$$10 - 4 = 6$$



$$8 - 2 = 6$$



$$8 - 3 = 5$$